

Zähler
Nenner

Aufgaben

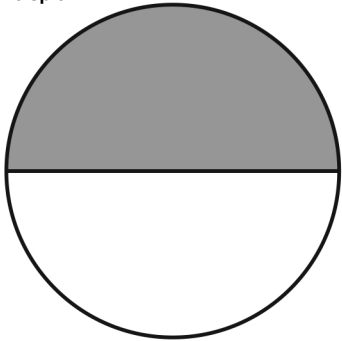
50_01_0 [355] Bruchrechnung Stammbruch Kreis

Ein Bruchteil des Kreis

Name _____

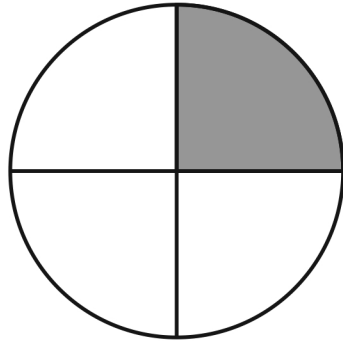
Datum _____

Beispiel



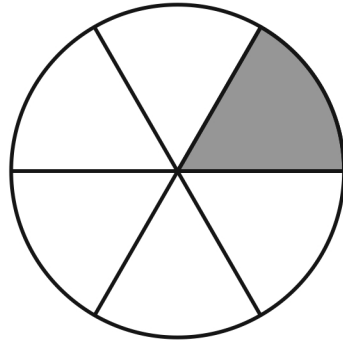
$$\frac{1}{2}$$

Zähler
Nenner



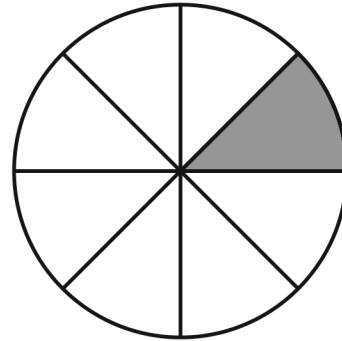
$$\frac{1}{4}$$

Zähler
Nenner



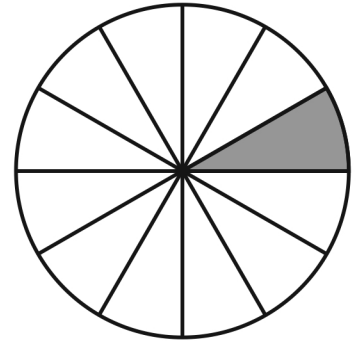
$$\frac{1}{6}$$

Zähler
Nenner

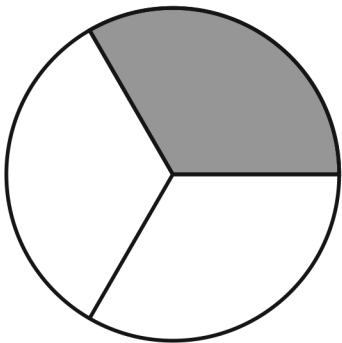


$$\frac{\quad}{8}$$

Zähler
Nenner

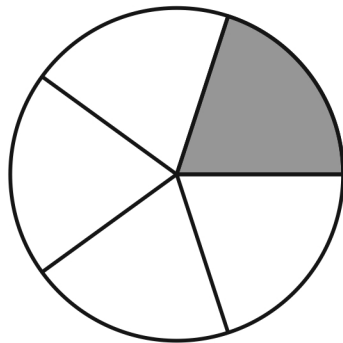


$$\frac{\quad}{10}$$



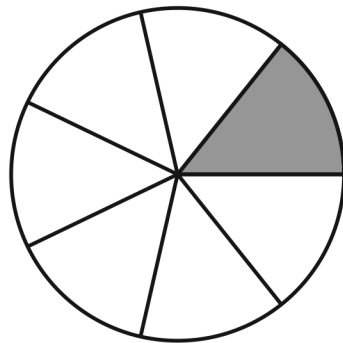
$$\frac{\quad}{3}$$

Zähler
Nenner



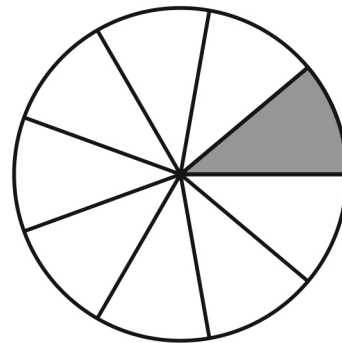
$$\frac{\quad}{5}$$

Zähler
Nenner



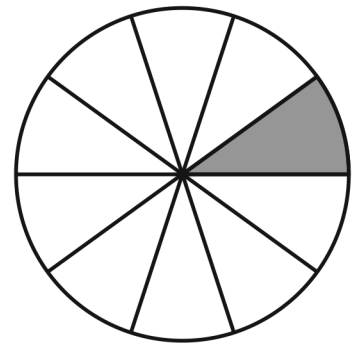
$$\frac{\quad}{7}$$

Zähler
Nenner



$$\frac{\quad}{9}$$

Zähler
Nenner



$$\frac{\quad}{11}$$

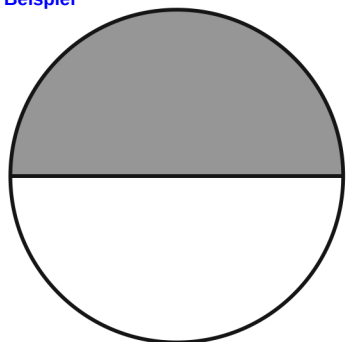
Zähler
Nenner

Lösung

50_01_0 [355] Bruchrechnung Stammbruch Kreis

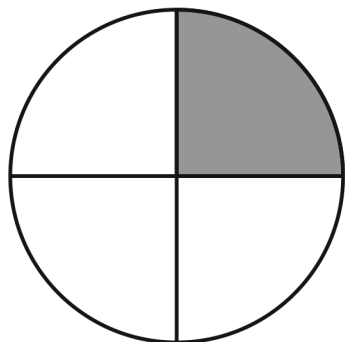
Ein Bruchteil des Kreis

Beispiel



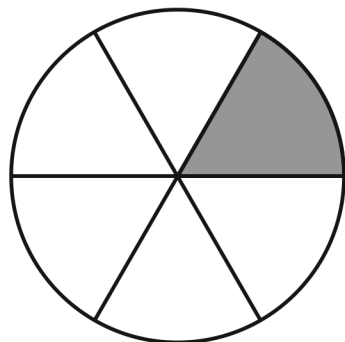
$$\frac{1}{2}$$

Zähler
Nenner



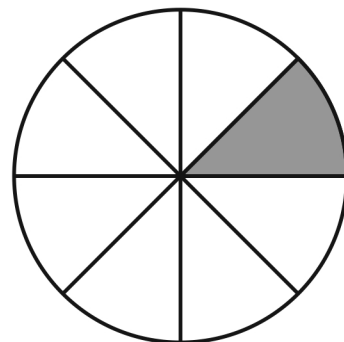
$$\frac{1}{4}$$

Zähler
Nenner



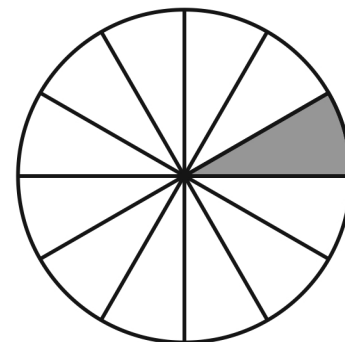
$$\frac{1}{6}$$

Zähler
Nenner

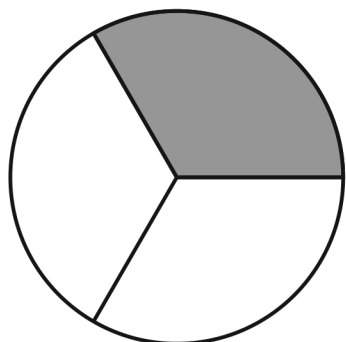


$$\frac{1}{8}$$

Zähler
Nenner

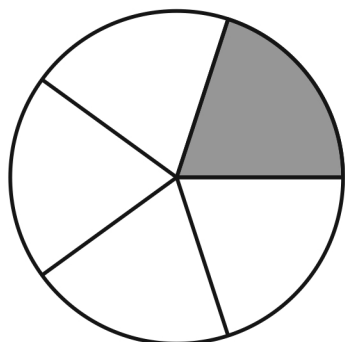


$$\frac{1}{12}$$



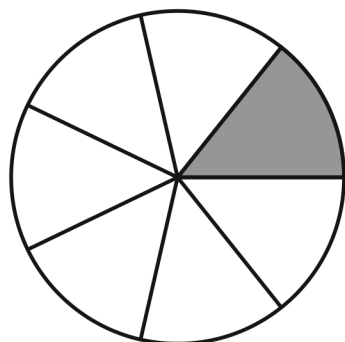
$$\frac{1}{3}$$

Zähler
Nenner



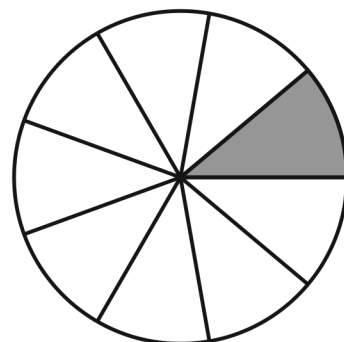
$$\frac{1}{5}$$

Zähler
Nenner



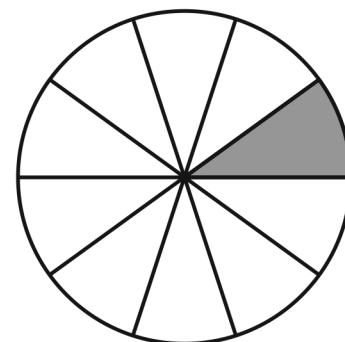
$$\frac{1}{7}$$

Zähler
Nenner



$$\frac{1}{9}$$

Zähler
Nenner



$$\frac{1}{10}$$

Lösung

2014-10-22