

Zähler
Nenner

Aufgaben

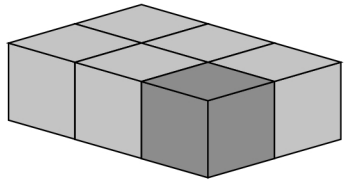
50_06_0 [606] Bruchrechnung Stammbruch Quader/Würfel

Ein Bruchteil der Kiste

Name

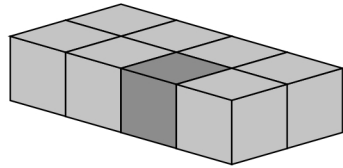
Datum

Beispiel



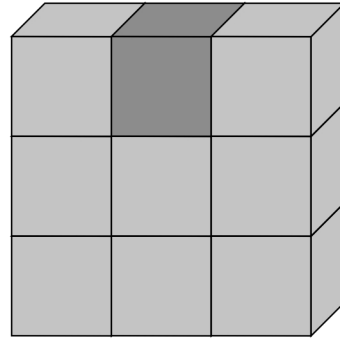
$$\frac{1}{6}$$

Zähler
Nenner



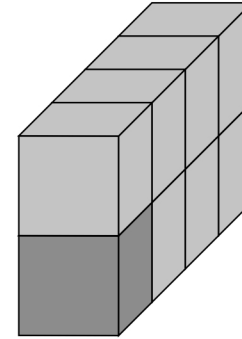
$$\frac{1}{6}$$

Zähler
Nenner



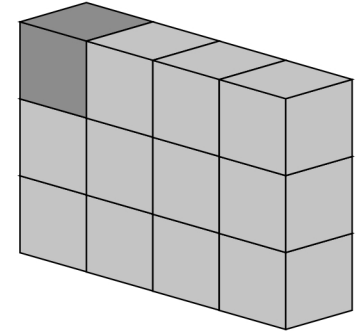
$$\frac{1}{6}$$

Zähler
Nenner

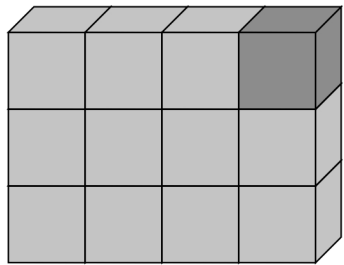


$$\frac{\quad}{6}$$

Zähler
Nenner

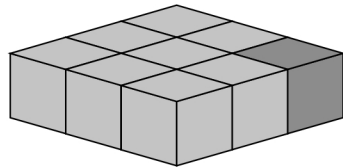


$$\frac{\quad}{6}$$



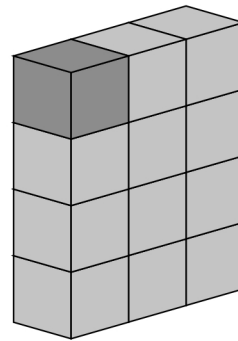
$$\frac{\quad}{6}$$

Zähler
Nenner



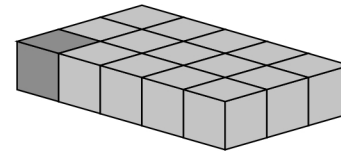
$$\frac{\quad}{6}$$

Zähler
Nenner



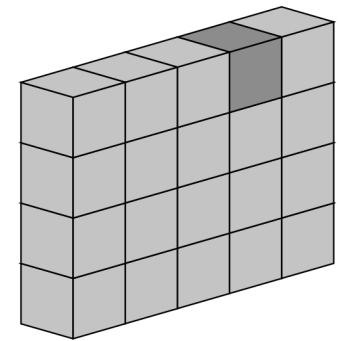
$$\frac{\quad}{6}$$

Zähler
Nenner



$$\frac{\quad}{6}$$

Zähler
Nenner



$$\frac{\quad}{6}$$

Zähler
Nenner

Lösung

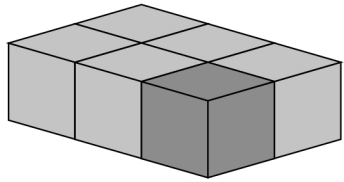
50_06_0 [606] Bruchrechnung Stammbruch Quader/Würfel

Ein Bruchteil der Kiste

Beispiel

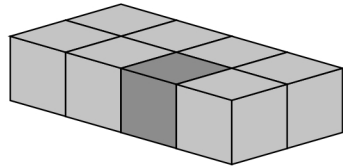
Lösung

2014-10-19



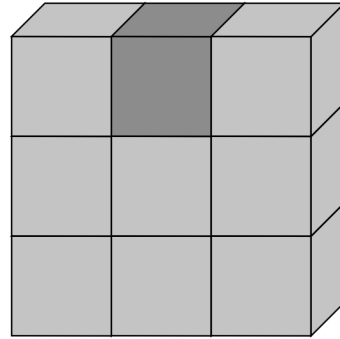
$$\frac{2}{6}$$

Zähler
Nenner



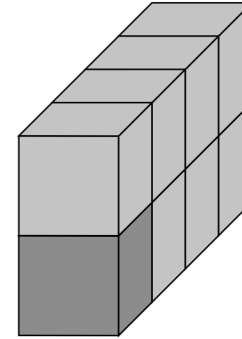
$$\frac{4}{8}$$

Zähler
Nenner



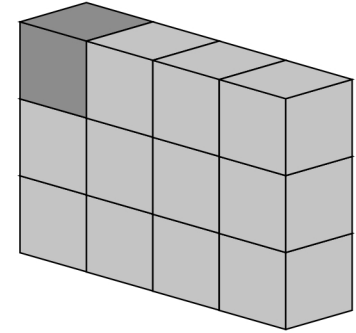
$$\frac{9}{9}$$

Zähler
Nenner

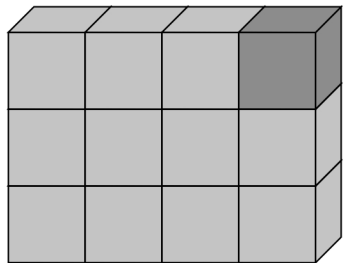


$$\frac{8}{8}$$

Zähler
Nenner

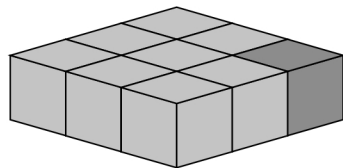


$$\frac{12}{12}$$



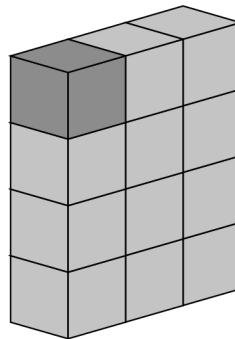
$$\frac{12}{12}$$

Zähler
Nenner



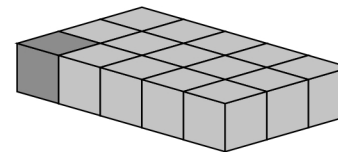
$$\frac{8}{9}$$

Zähler
Nenner



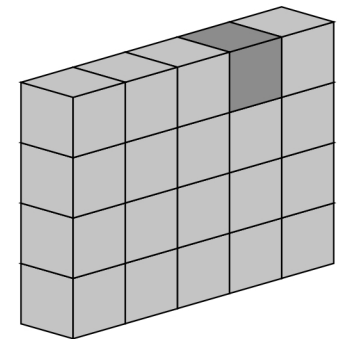
$$\frac{9}{12}$$

Zähler
Nenner



$$\frac{15}{15}$$

Zähler
Nenner



$$\frac{20}{20}$$