

Aufgaben


40_11_1 [233] Analog Uhr - Uhrzeit, 12 Stunden

Der kleine Zeiger heißt Stundenzeiger und der große Zeiger heißt Minutenzeiger.


Notiere die Uhrzeit unter der jeweiligen Uhr.

Wie spät ist es?


Beispiel




2 Uhr




 Uhr




 Uhr



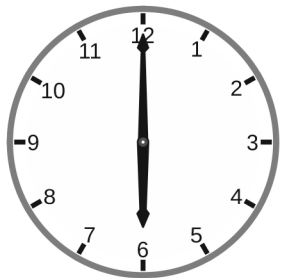
 Uhr




 Uhr




 Uhr




 Uhr




 Uhr




 Uhr



 Uhr



 Uhr



 Uhr

Der kleine Zeiger heißt Stundenzeiger.


Der große Zeiger heißt Minutenzeiger.




Notiere die Uhrzeit unter der jeweiligen Uhr.

Wie spät ist es?


Beispiel




2 Uhr




6 Uhr




1 Uhr



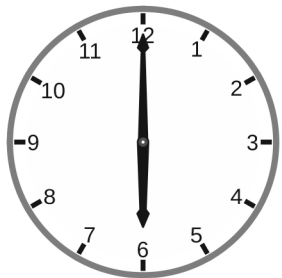
3 Uhr




2 Uhr




12 Uhr




6 Uhr




7 Uhr




2 Uhr



7 Uhr



8 Uhr



6 Uhr

Der kleine Zeiger heißt Stundenzeiger.

Der große Zeiger heißt Minutenzeiger.

